


# Poorly pets

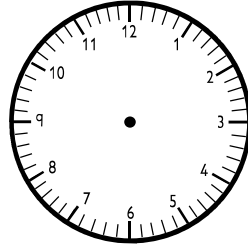


- Draw the hands on the clock to show the time that each pet should take its next pill.


1. It is now



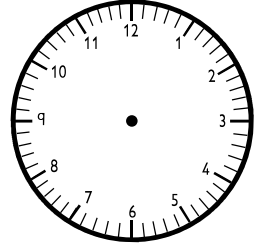
Take next pill in 4 hours.




2. It is now



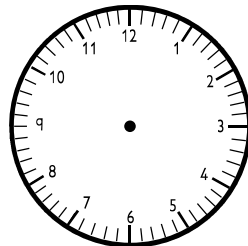
Take next pill in  $\frac{1}{2}$  an hour.



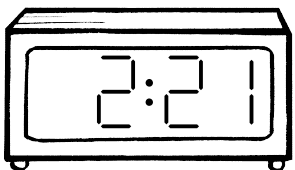
3. It is now



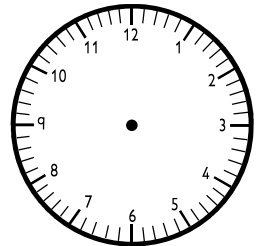
Take next pill in 6 hours.




4. It is now



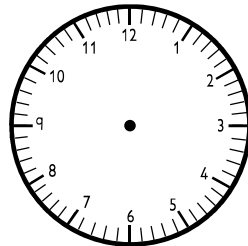
Take next pill in 45 minutes.



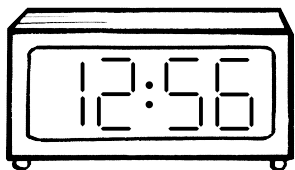
5. It is now



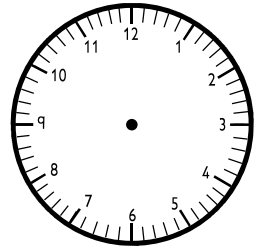
Take next pill in  $2\frac{1}{4}$  hours.



6. It is now



Take next pill in 35 minutes.




**NOW TRY THIS!**



- Write the time of this pet's next pill in digital form.

It is now



Take next pill in 55 minutes.

Teachers' note Provide the children with analogue clocks with moveable, geared hands to help them work out the new times.

100% New Developing Mathematics  
Understanding Shapes and  
Measures: Ages 8–9  
© A & C BLACK