

Spring Maths Revision

Activity Booklet **Answers**

Collect the Daffodils

12 32 40 54 67 99

50 51 52 53 55 59

4 14 34 64 84 94

81 76 67 63 36 21

98 88 78 38 28 18

20 19 17 14 11 10

Match the Carrots to the Bunnies

43 – 3 ones

96 – 9 tens

78 – 8 ones

21 – 2 tens

30 – no ones

44 – same number of tens and ones

57 – 5 tens

75 – 5 ones

32 – 2 ones

2 – no tens

Easter Addition and Subtraction

$$4 + 5 + 6 = 15$$

$$8 + 7 = 15$$

$$34 + 42 = 76$$

$$51 + 23 = 74$$

$$45 + 10 = 55$$


$$67 + 9 = 76$$

$$82 - 10 = 72$$

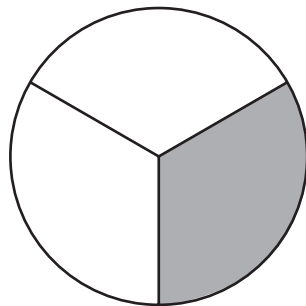
$$93 - 22 = 71$$

$$92 - 18 = 74$$

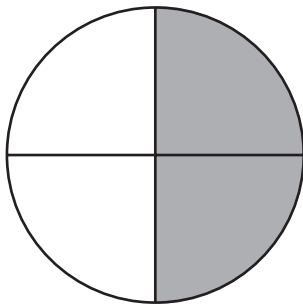
Fractions



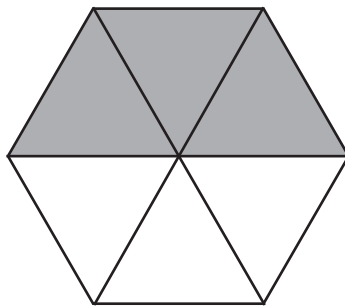
Shade $\frac{1}{4}$



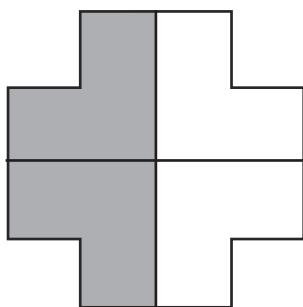
Shade $\frac{1}{3}$



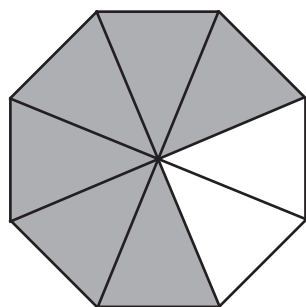
Shade $\frac{1}{2}$



Shade $\frac{1}{2}$



Shade $\frac{2}{4}$



Shade $\frac{3}{4}$

Flower Fractions

$\frac{1}{2}$ of 10 is 5

$\frac{1}{4}$ of 8 is 2

$\frac{1}{3}$ of 9 is 3

$\frac{3}{4}$ of 12 is 9 ($12 \div 4 = 3$, $3 \times 3 = 9$)

How Big Is the Chick?

chick A = 6cm

chick B = 3cm

chick C = 5cm

chick D = 9cm

chick A chick B

chick B chick C

chick A + chick B chick D

Marvellous Milkshakes

Toffee Surprise

Example answer: $20p + 5p + 2p + 1p$

Marvellous Marshmallow

Example answer: $10p + 10p + 10p + 5p$

Choco Chip

Example answer: $20p + 20p + 1p$

Nutty Delight

Example answer: $50p + 10p + 5p + 1p$

How Many Jelly Beans?

Colours	Tally	Number
Yellow	III	3
Pink	HHH	5
Purple	III	3
Orange	II	2
Brown	HHH I	6
Green	I	1


How many pink jelly beans were there? **5**

How many more purple jelly beans than green jelly beans were there? **2**


Which colour had the jelly beans? **brown**

How many jelly beans were in the packet altogether? **20**


Spring Time




6 o'clock




quarter past 8




twenty past 7




5 to 3




half past 1




quarter to 9



10 past 10



25 to 5



12 o'clock

Spring Shapes

This shape has 3 sides and 3 corners. **triangle**

This shape has five sides and five corners. **pentagon**

This shape has two long sides and two short sides. **rectangle**

This shape has one curved side and no corners. **circle**

Flower Boxes

Mum	"Mum's box will have two faces and one point. One of the faces is a circle."	cone
Dad	"Dad's box will have six square faces and 8 vertices."	cube
Grandad	"Grandad's box will have no edges and no vertices."	sphere
Little brother	"My little brother's box will have 5 faces. 3 of the faces are rectangles and two are triangles."	triangular prism
Best friend	"My best friend's box will have three faces and no vertices."	cylinder

Spring Puzzles

1. James has 20 daffodils. He gives 11 of them away. How many does he have left?
 $20 - 11 = 9$
He has 9 daffodils left.
2. Sam picks some flowers. He gives half of them to his mum. He has 8 flowers left. How many flowers did he pick? **8 is half of 16, so he picked 16 flowers.**
3. Maisie spends exactly 20p on treats. Tick the selection of treats that she buys.



Spring Puzzles

1. Max is packing up cakes for the Spring fair. He puts two cakes in each bag. How many cakes are there altogether?

$$6 \times 2 = 12$$

There are 12 cakes altogether.

2. Mo is decorating cakes for the fair. He wants to put 3 chocolate buttons on each cake. How many buttons will he need?

$$10 \times 3 = 30$$

He needs 30 buttons.

3. Mina plants some carrots for her rabbit. She plants 5 rows with 4 carrots in each. When the carrots have grown, she pulls up 3 to give to her rabbit. How many carrots are left?

$$5 \times 4 = 20 \quad 20 - 3 = 17$$

17 carrots are left.

4. Joe wants to give some flowers to his mum, his gran and his aunt. He wants to give them 5 flowers each. Tick two number sentences he could use to work out how many flowers he needs altogether.

$$3 \times 5 \checkmark$$

$$3 + 3 + 3$$

$$5 + 5 + 5 \checkmark$$

$$5 \times 5$$